

Review

Write each as an algebraic expression.

1) a number increased by 8 is equal to 26

2) 8 less than t is equal to 38

Write each as a verbal expression.

3) $n9 > 8 -$

Evaluate each expression.

4) 4 cubed

5) $5 \times (9 \times 2) \div 6$

6) $\frac{11 + 1}{2 + 4}$

7) $5 + (-4)$

8) $8 - 1 - 1$

9) $(-5) - (-4) - (-7) + 7$

Evaluate each using the values given.

10) $(x + z + z) \div 2$; use $x = 6$, and $z = 2$

11) $n + p^2 + p$; use $n = 6$, and $p = 3$

Name the set or sets to which each number belongs.

12) 11

Find each product.

13) $(-4)(9)$

14) $(5)(-5)(2)$

15) $4(5n + 4)$

16) $(6b + 7)(3b - 5)$

17) $(4 + 8r)(4 - 8r)$

18) $(1 + 4x)^2$

Find each quotient.

19) $\frac{48}{-6}$

20) $-30 \div -3$

Simplify each expression.

21) $1 + 3v + 5v$

22) $-9(x - 6)$

23) $-9 - 10(x - 3)$

24) $-10(a + 8) - 4(3a - 10)$

25) $(8 + 6a - 3a^2) + (5a - 3 - 5a^2)$

26) $(5x^3 + 3x^2 - x) - (x^2 - 7x^3 + 5x)$

27) $\frac{9x^2}{10x^2} \cdot \frac{3}{2}$

28) $\frac{(n-4)(n+2)}{(n+2)(n-2)} \cdot \frac{9n(n-2)}{9n}$

29) $\frac{1}{m-9} \cdot \frac{8m^2 - 64m}{m-8}$

30) $\frac{9}{3r^2} \div \frac{3}{4r^3}$

31) $\frac{7x(x+4)}{(x+4)(x-4)} \div \frac{x+4}{x-4}$

32) $\frac{1}{n+6} \div \frac{2}{n^2+n-30}$

33) $\frac{6y}{3} + \frac{2x}{3x^3}$

34) $\frac{4v}{2v} + \frac{2}{9v^2 + 3v}$

Find each percent change. State if it is an increase or a decrease.

35) From 21 inches to 84 inches

Solve each equation.

36) $\frac{n}{5} = -\frac{1}{5}$

37) $-31 = a + (-17)$

38) $4k - 10 = 2$

39) $42 = -6 - 6x$

40) $2 + 8(x + 5) = 74$

41) $-8(1 + 4n) = -8 + 5n$

42) $-4(8m + 3) - 5m = -5m - 3(m + 4)$

43) $|p| = 1$

44) $|3x| = 18$

45) $10 \left| \frac{n}{10} \right| = 8$

46) $\frac{|b+2|}{7} = 1$

47) $10 - 5|8 + 2r| = -120$

Solve each equation. Remember to check for extraneous solutions.

48) $\sqrt{x} = 10$

49) $5 = -1 + \sqrt{n}$

50) $\frac{1}{4a} = \frac{5}{2a} + \frac{1}{4}$

51) $-1 = \sqrt{v+1} - 10$

52) $-1 = \sqrt{2x} - 7$

53) $\sqrt{-5-2x} = \sqrt{x+4}$

54) $n = \sqrt{2-n}$

55) $\sqrt{29-5k} + 7 = k$

56) $\frac{5}{p} = \frac{1}{p} - 1$

57) $\frac{3}{x+5} = \frac{1}{x+5} + 1$

58) $\frac{3}{2} + \frac{n^2 + 9n + 18}{2n} = \frac{1}{2}$

59) $\frac{2m+10}{m^2-m} + \frac{m+4}{m} = \frac{6m+18}{m-1}$

Solve each proportion.

60) $\frac{r}{9} = \frac{6}{8}$

61) $\frac{10}{3} = \frac{x}{5}$

62) $\frac{4}{10} = \frac{7}{n-1}$

63) $-\frac{4}{5} = \frac{b+4}{b}$

64) $\frac{v+10}{v+5} = \frac{9}{8}$

65) $\frac{7x+2}{8} = \frac{x+3}{5}$

Solve each problem.

66) 8.2 grams is 6% of what?

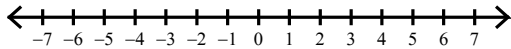
- 67) Kristin made a trip to the train station and back. On the trip there she drove 24 km/h and on the return trip she went 60 km/h. How long did the trip there take if the return trip took two hours?
- 68) 16 lbs. of mixed nuts containing 20% peanuts were mixed with 10 lbs. of another kind of mixed nuts that contain 72% peanuts. What percent of the new mixture is peanuts?
- 69) Yellowstone National Park is a popular field trip destination. This year the senior class at High School A and the senior class at High School B both planned trips there. The senior class at High School A rented and filled 13 vans and 11 buses with 401 students. High School B rented and filled 13 vans and 6 buses with 266 students. Each van and each bus carried the same number of students. How many students can a van carry? How many students can a bus carry?
- 70) The local amusement park is a popular field trip destination. This year the senior class at High School A and the senior class at High School B both planned trips there. The senior class at High School A rented and filled 9 vans and 9 buses with 567 students. High School B rented and filled 3 vans and 10 buses with 539 students. Each van and each bus carried the same number of students. How many students can a van carry? How many students can a bus carry?
- 71) Yellowstone National Park is a popular field trip destination. This year the senior class at High School A and the senior class at High School B both planned trips there. The senior class at High School A rented and filled 11 vans and 13 buses with 641 students. High School B rented and filled 6 vans and 10 buses with 466 students. Each van and each bus carried the same number of students. Find the number of students in each van and in each bus.
- 72) Maria left the airport and traveled toward the town hall. Wilbur left one hour later traveling at 65 km/h in an effort to catch up to Maria. After traveling for four hours Wilbur finally caught up. What was Maria's average speed?
- 73) Eugene created a metal containing 30% platinum by combining 2 kg of pure platinum with 10 kg of another metal. What percent of the other metal was platinum?
- 74) Huong and Darryl each improved their yards by planting grass sod and ivy. They bought their supplies from the same store. Huong spent \$169 on 11 ft² of grass sod and 10 pots of ivy. Darryl spent \$44 on 1 ft² of grass sod and 5 pots of ivy. What is the cost of one ft² of grass sod and the cost of one pot of ivy?

Solve each question. Round your answer to the nearest hundredth.

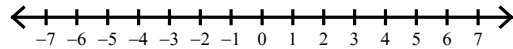
- 75) It takes Amy 12 minutes to sweep a porch. Gabriella can sweep the same porch in 13 minutes. If they worked together how long would it take them?
- 76) Mike can mop a warehouse in 12 hours. One day his friend Jenny helped him and it only took 5.14 hours. How long would it take Jenny to do it alone?

Draw a graph for each inequality.

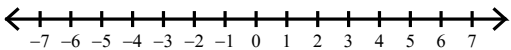
77) $b < 3$



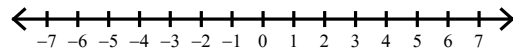
78) $6 < x$



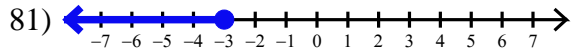
79) $-x \leq -4$



80) $-1 \leq -a$

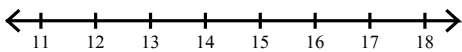


Write an inequality for each graph.

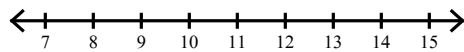


Solve each inequality and graph its solution.

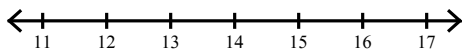
82) $5x > 75$



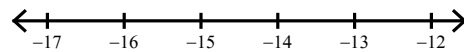
83) $-7x \leq -77$



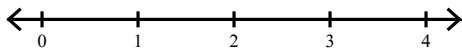
84) $7 \geq \frac{n+8}{3}$




85) $\frac{9+k}{2} \leq -3$



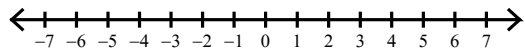
86) $4p + 5(p+6) \geq 48$



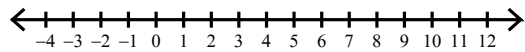
87) $6x + 34 < 2(7x + 1)$



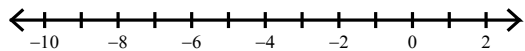
88) $|n| < 6$



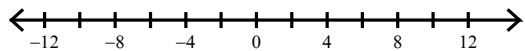
89) $|m-4| \geq 4$



90) $|-2r-8| \geq 6$

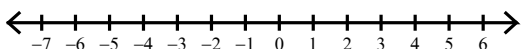


91) $|4-8x| - 9 \geq 67$

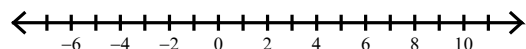


Solve each compound inequality and graph its solution.


92) $-8 + n < -12$ or $3n > 6$



93) $6b - 6 > 36$ or $8b - 2 < -34$

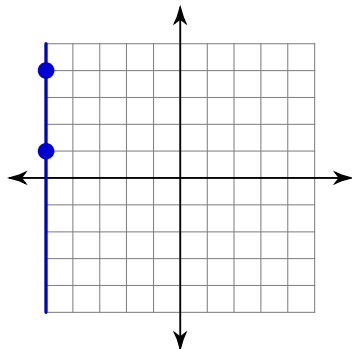


94) $-1 - 9v \geq -10v - 5$ and $5v - 9 \geq 7v - 3$



Find the slope of each line.

95)



96) $y = -\frac{1}{2}x + 4$

97) $2x - y = 5$

Find the slope of the line through each pair of points.

98) $(-20, -10), (10, 8)$

Find the slope of a line parallel to each given line.

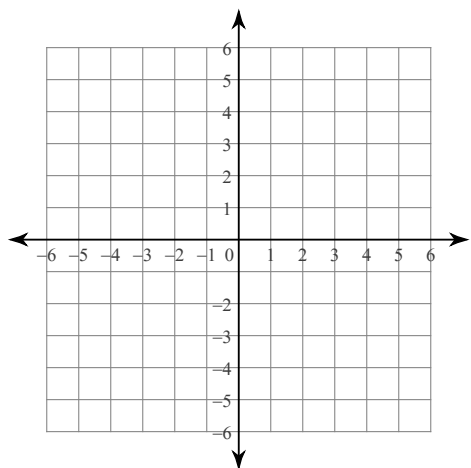
99) $y = -x - 4$

Find the slope of a line perpendicular to each given line.

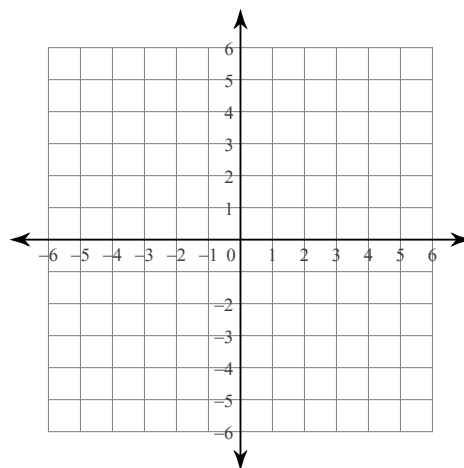
100) $y = \frac{1}{4}x - 3$

Sketch the graph of each line.

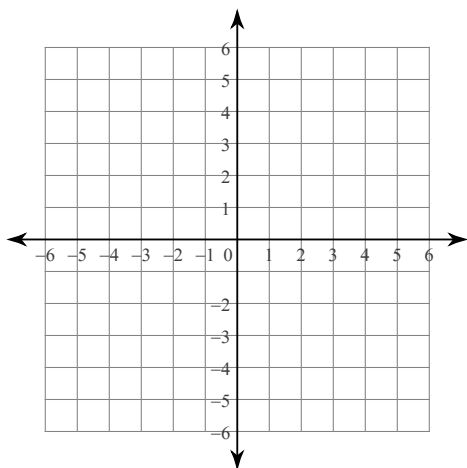
101) x -intercept = 5, y -intercept = -5



102) $x + y = -4$

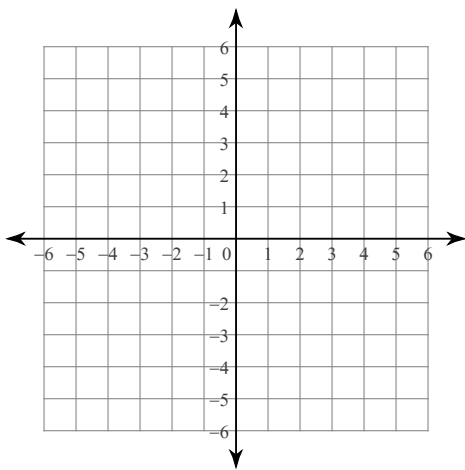


103) $y = -\frac{1}{3}x - 2$

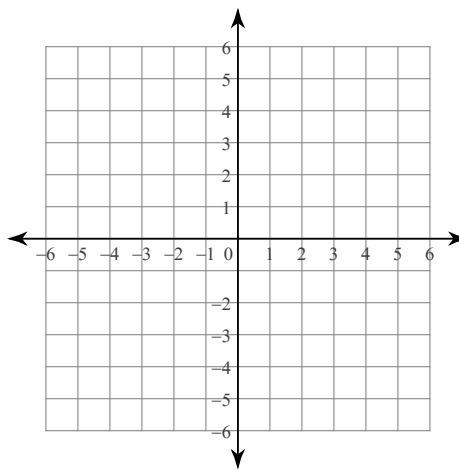


Graph each equation.

104) $y = |x| - 1$

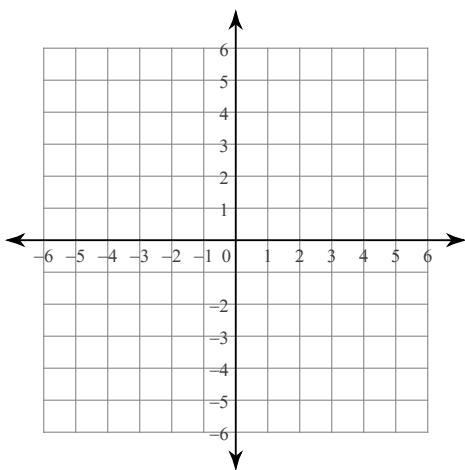


105) $y = -|x - 2|$

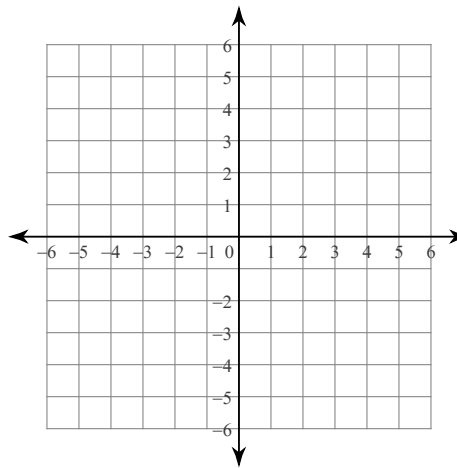


Sketch the graph of each linear inequality.

106) $y > \frac{1}{2}x + 3$

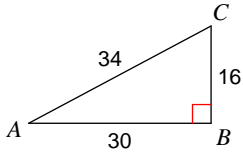


107) $4x + 3y \geq 15$

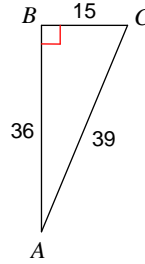


Find the value of each trigonometric ratio.

108) $\cos A$



109) $\cos C$

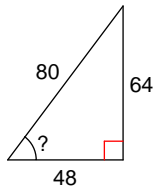


Find the value of each trigonometric ratio to the nearest ten-thousandth.

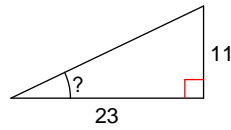
110) $\cos 65^\circ$

Find the measure of the indicated angle to the nearest degree.

111)



112)

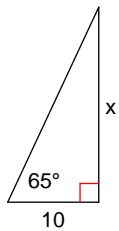


Find each angle measure to the nearest degree.

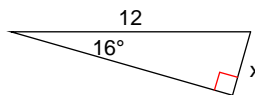
113) $\tan A = 0.1763$

Find the missing side. Round to the nearest tenth.

114)



115)



Simplify. Your answer should contain only positive exponents.

116) $3^{-3} \cdot 3^3$

117) 4^4

118) $\frac{3^2}{3^3}$

119) $y^{-2} \cdot 2x^2y^4$

120) $(b^{-1})^4$

121) $\frac{2y^4}{3x^3y^{-1}}$

Write each number in scientific notation.

122) 0.4

123) 0.00009

Write each number in standard notation.

124) 5×10^2

Simplify. Write each answer in scientific notation.

125) $(9 \times 10^3)(0.7 \times 10^{-4})$

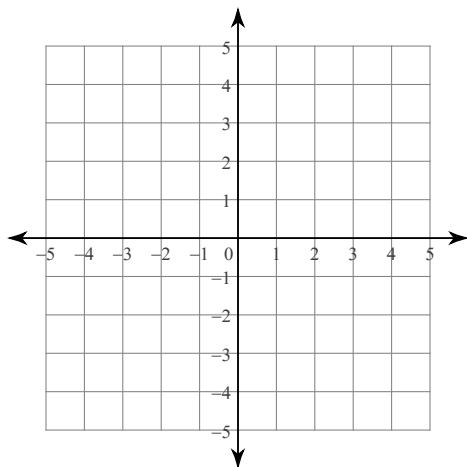
126) $\frac{6 \times 10^{-5}}{6.8 \times 10^1}$

127) $(1.15 \times 10^6)^{-1}$

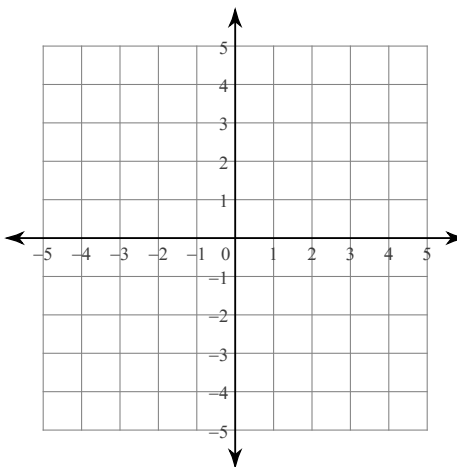
128) $\frac{4.9 \times 10^4}{2.7 \times 10^{-3}}$

Solve each system by graphing.

129) $2x - y = -4$
 $x - 4y = 12$



130) $y = x - 4$
 $y = -3x + 4$

**Solve each system by elimination.**

131) $5x - 7y = -26$
 $-5x - 6y = -13$

132) $2x - 2y = -16$
 $6x - 2y = -8$

133) $-2x + 7y = -23$
 $-8x + 6y = -26$

134) $8x - 5y = 0$
 $-6x + 7y = 0$

Solve each system by substitution.

135) $y = -7x - 10$
 $y = 5x + 2$

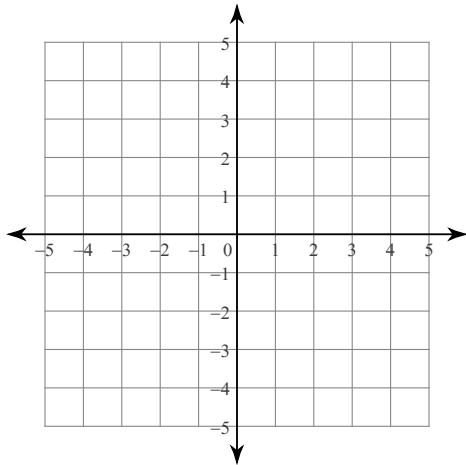
136) $y = 2x - 8$
 $-x - 2y = -9$

137) $x + 5y = 5$
 $-3x + 2y = 2$

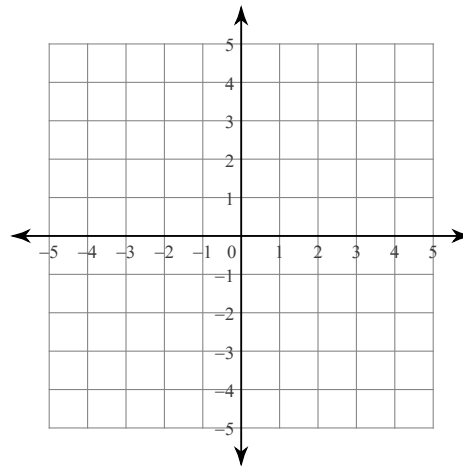
138) $6x + 6y = -6$
 $3x - 3y = 9$

Sketch the solution to each system of inequalities.

139) $2x + y < -3$
 $x - y \geq -3$



140) $y < -2x + 3$
 $y \leq -\frac{1}{3}x - 2$



Name each polynomial by degree and number of terms.

141) $k^4 - 2k + 7$

142) 7

Factor each completely.

143) $k^2 + 4k - 32$

144) $7x^2 - 53x - 24$

145) $6x^2 + 41x + 63$

146) $16p^2 - 1$

147) $50 - 20x + 2x^2$

148) $4n^4 - 20n^2 + 25$

149) $21m^3 - 15m^2 - 7m + 5$

150) $9pc + 3pd + 15qc + 5qd$

151) $28p^2z^2 - q^2c + 7p^2c - 4q^2z^2$

Divide.

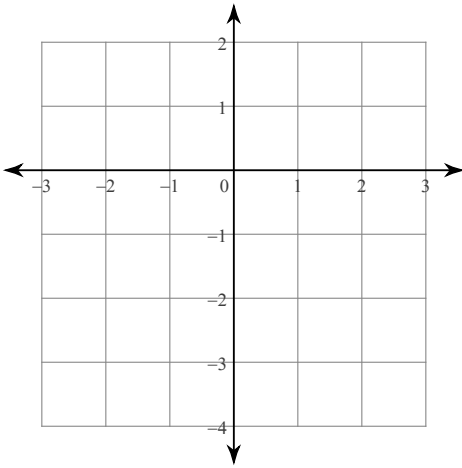
152) $(2n^3 + 20n^2 + 20n) \div 10n^3$

153) $(b^2 + b + 6) \div (b - 1)$

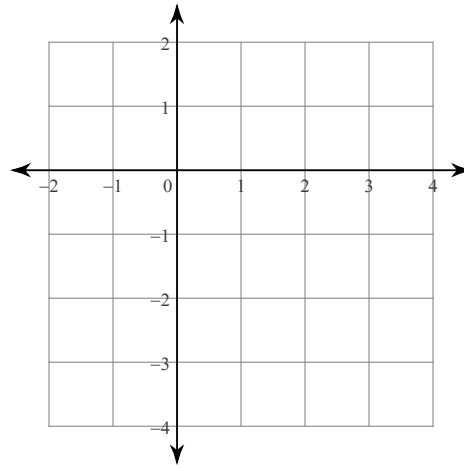
154) $(10v^3 - 46v^2 - 25v + 33) \div (v - 5)$

Sketch the graph of each function.

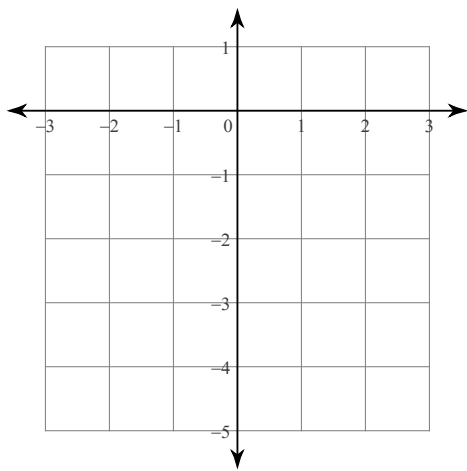
155) $y = -\frac{1}{2}x^2$



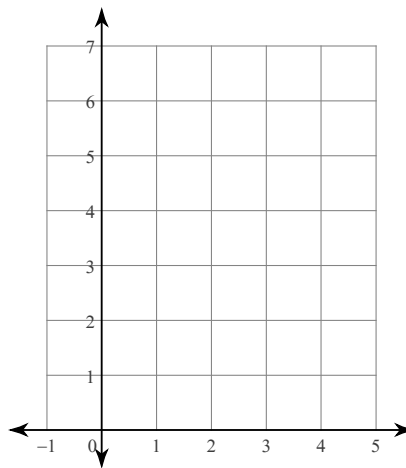
156) $y = -\frac{1}{2}x^2$



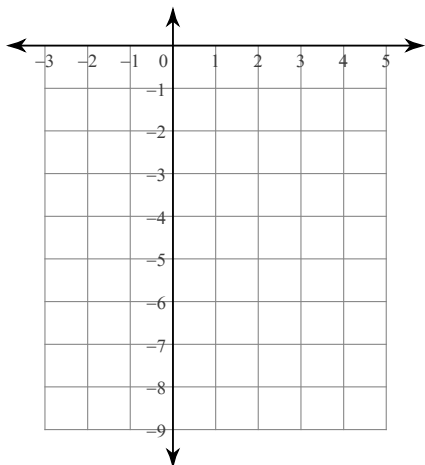
157) $-y = x^2$



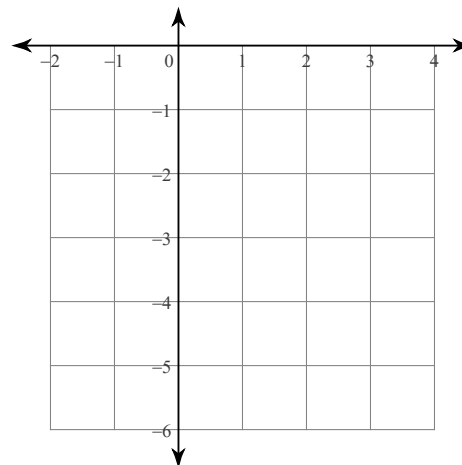
158) $y = x^2 - 6x + 11$



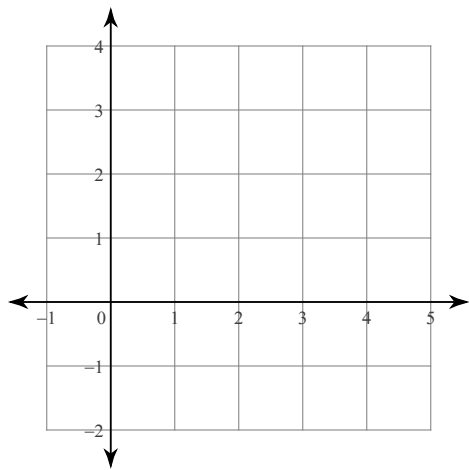
159) $y = -(x - 1)^2 - 4$



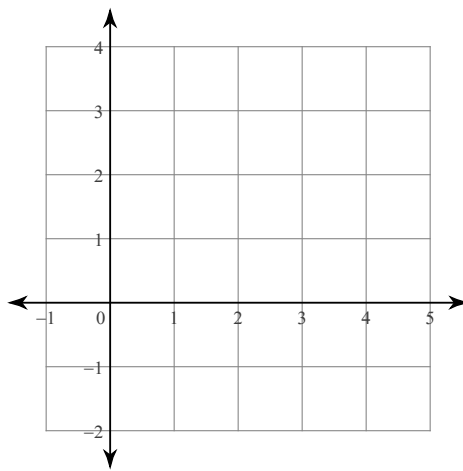
160) $-2(y + 3) = (x - 2)^2$



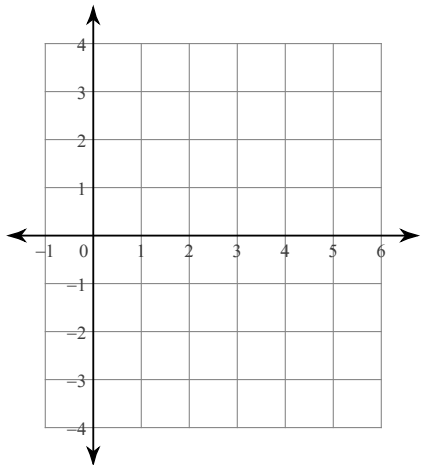
$$161) y < x^2 - 4x + 3$$



$$162) y \geq -(x - 2)^2 + 3$$



$$163) -2(y - 1) < (x - 4)^2$$



Solve each equation by completing the square.

$$164) x^2 + 16x - 36 = 0$$

$$165) 5n^2 + 10n - 65 = 10$$

Solve each equation by taking square roots.

166) $b^2 = 18$

167) $5v^2 - 10 = -17$

Solve each equation by factoring.

168) $x^2 + 5x - 24 = 0$

169) $n^2 = -20 + 9n$

Solve each equation with the quadratic formula.

170) $-3a^2 - 2a - 6 = 0$

171) $5v^2 = 5 - 8v$

Simplify.

172) $\sqrt{20x^3}$

173) $\sqrt{27x^4y}$

174) $2\sqrt{6} - \sqrt{24}$

175) $3\sqrt{24} - 2\sqrt{45} - 2\sqrt{20}$

176) $-5\sqrt{3} \cdot \sqrt{3}$

177) $5\sqrt{6}(-2\sqrt{2} - 2\sqrt{3})$

178) $\frac{\sqrt{15}}{\sqrt{20}}$

179) $\frac{-5 + \sqrt{3}}{4\sqrt{25}}$

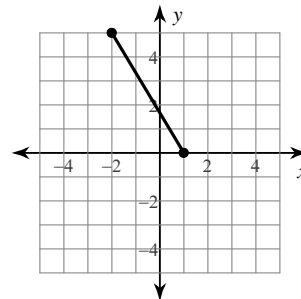
180) $\frac{2}{-3 - 4\sqrt{5}}$

181) $\frac{-5 - 3\sqrt{2}}{5 + 4\sqrt{5}}$

Find the distance between each pair of points.

182) $(-2, -1), (2, 6)$

183)



Find the midpoint of the line segment with the given endpoints.

184) $(8, -4), (-7, 8)$

Given the midpoint and one endpoint of a line segment, find the other endpoint.

185) Endpoint: $(-10, -7)$, midpoint: $(0, 5)$

Simplify each and state the excluded values.

186) $-\frac{49n}{35n^2}$

187) $\frac{18a}{45a - 36}$

188) $\frac{k^2 - 5k - 24}{k^2 + 2k - 80}$

189) $\frac{2p^2 - 6p + 4}{5p^4 - 20p^3 + 20p^2}$

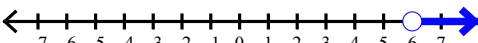
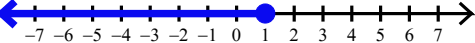
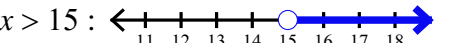

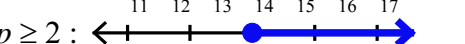
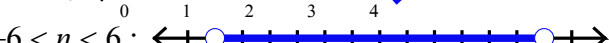
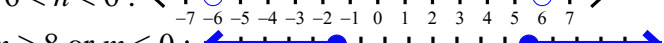

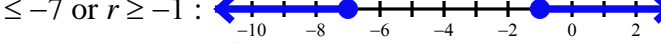
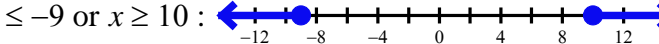
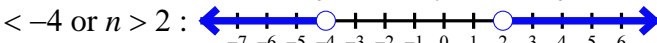
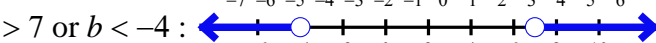
190) $\frac{40x^2}{20x}$

191) $\frac{42n - 60}{12n^2}$

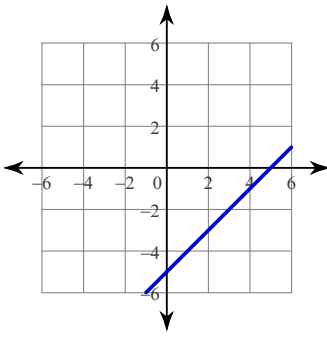
192) $\frac{9m + 36}{m^2 - 2m - 24}$

193) $\frac{-5r^2 + 25r - 30}{2r^3 + 8r^2 - 42r}$

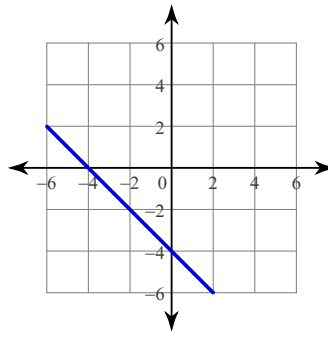
Answers to Review

- 1) $n + 8 = 26$ 2) $t - 8 = 38$ 3) 8 less than n is greater than 9
 4) 64 5) 15 6) 2 7) 1
 8) 6 9) 13 10) 5 11) 18
 12) N, W, Z, Q, R 13) -36 14) -50 15) $20n + 16$
 16) $18b^2 - 9b - 35$ 17) $16 - 64r^2$ 18) $1 + 8x + 16x^2$ 19) -8
 20) 10 21) $1 + 8v$ 22) $-9x + 54$ 23) $21 - 10x$
 24) $-22a - 40$ 25) $-8a^2 + 11a + 5$ 26) $12x^3 + 2x^2 - 6x$ 27) $\frac{27}{20}$
 28) $n - 4$ 29) $\frac{8m}{m - 9}$ 30) $4r$ 31) $\frac{7x}{x + 4}$
 32) $\frac{n - 5}{2}$ 33) $\frac{6yx^2 + 2}{3x^2}$ 34) $\frac{18v^2 + 6v + 2}{3v(3v + 1)}$ 35) 300% increase
 36) $\{-1\}$ 37) $\{-14\}$ 38) $\{3\}$ 39) $\{-8\}$
 40) $\{4\}$ 41) $\{0\}$ 42) $\{0\}$ 43) $\{1, -1\}$
 44) $\{6, -6\}$ 45) $\{8, -8\}$ 46) $\{5, -9\}$ 47) $\{9, -17\}$
 48) $\{100\}$ 49) $\{36\}$ 50) $\{-9\}$ 51) $\{80\}$
 52) $\{18\}$ 53) $\{-3\}$ 54) $\{1\}$ 55) No solution.
 56) $\{-4\}$ 57) $\{-3\}$ 58) $\{-2, -9\}$ 59) $\left\{-3, \frac{2}{5}\right\}$
 60) $\left\{\frac{27}{4}\right\}$ 61) $\left\{\frac{50}{3}\right\}$ 62) $\left\{\frac{37}{2}\right\}$ 63) $\left\{-\frac{20}{9}\right\}$
 64) $\{35\}$ 65) $\left\{\frac{14}{27}\right\}$ 66) 136.7 grams 67) 5 hours
 68) 40% 69) Van: 8, Bus: 27 70) Van: 13, Bus: 50 71) Van: 11, Bus: 40
 72) 52 km/h 73) 16% 74) ft² of grass sod: \$9, pot of ivy: \$7
 75) 6.24 minutes 76) 8.99 hours
 78) 
 80) 
 82) $x > 15$: 
 84) $n \leq 13$: 
 86) $p \geq 2$: 
 88) $-6 < n < 6$: 
 89) $m \geq 8$ or $m \leq 0$: 
 90) $r \leq -7$ or $r \geq -1$: 
 91) $x \leq -9$ or $x \geq 10$: 
 92) $n < -4$ or $n > 2$: 
 93) $b > 7$ or $b < -4$: 
 94) $-4 \leq v \leq -3$: 
 95) Undefined 96) $-\frac{1}{2}$ 97) 2 98) $\frac{3}{5}$
 99) -1 100) -4

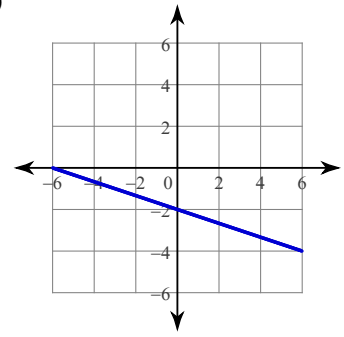
101)



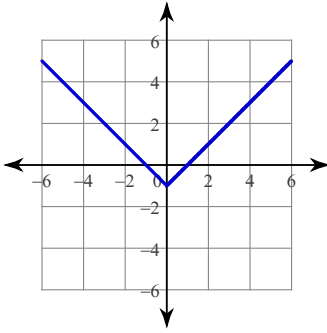
102)



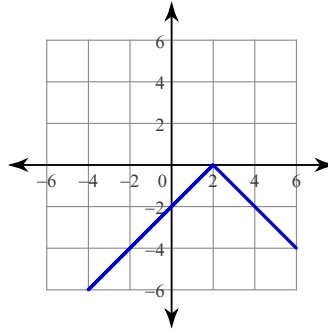
103)



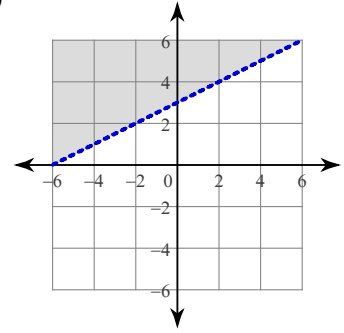
104)



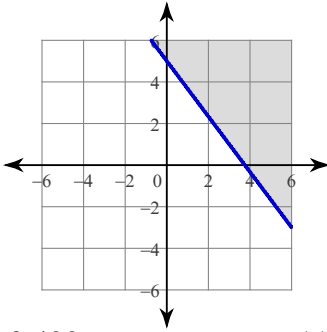
105)



106)



107)

108) $\frac{15}{17}$ 109) $\frac{5}{13}$

110) 0.4226

111) 53° 112) 26° 113) 10°

114) 21.4

115) 3.3

116) 1

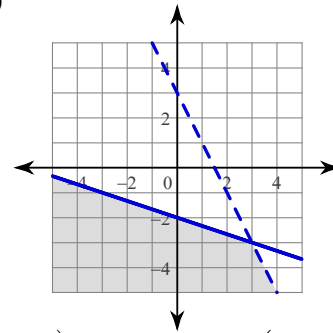
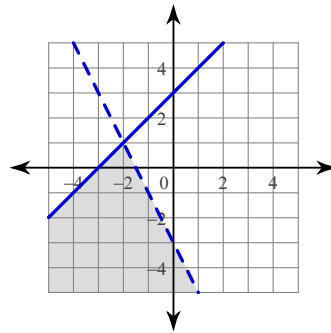
117) 4^4 118) $\frac{1}{3}$ 119) $2x^2y^2$ 120) $\frac{1}{b^4}$ 121) $\frac{2y^5}{3x^3}$ 122) 4×10^{-1} 123) 9×10^{-5}

124) 500

125) 6.3×10^{-1} 126) 8.824×10^{-7} 127) 8.696×10^{-7} 128) 1.815×10^7 129) $(-4, -4)$ 130) $(2, -2)$ 131) $(-1, 3)$ 132) $(2, 10)$ 133) $(1, -3)$ 134) $(0, 0)$ 135) $(-1, -3)$ 136) $(5, 2)$ 137) $(0, 1)$ 138) $(1, -2)$

139)

140)

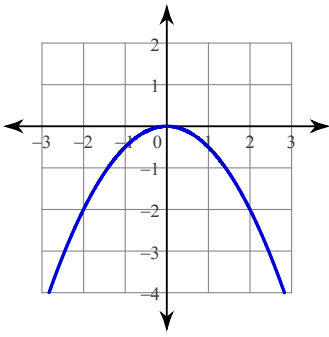


141) quartic trinomial

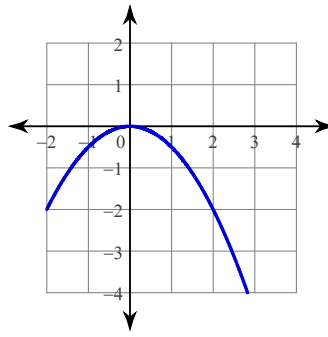
142) constant monomial

143) $(k-4)(k+8)$ 144) $(7x+3)(x-8)$ 145) $(3x+7)(2x+9)$ 146) $(4p+1)(4p-1)$ 147) $2(5-x)^2$ 148) $(2n^2-5)^2$ 149) $(3m^2-1)(7m-5)$ 150) $(3p+5q)(3c+d)$ 151) $(7p^2-q^2)(4z^2+c)$ 152) $\frac{1}{5} + \frac{2}{n} + \frac{2}{n^2}$ 153) $b + 2 + \frac{8}{b-1}$ 154) $10v^2 + 4v - 5 + \frac{8}{v-5}$

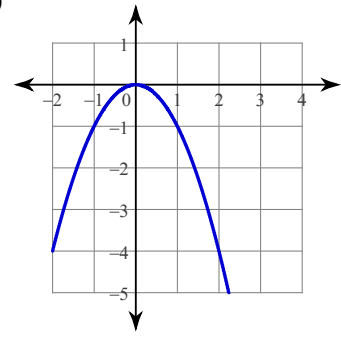
155)



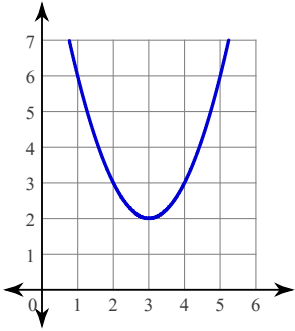
156)



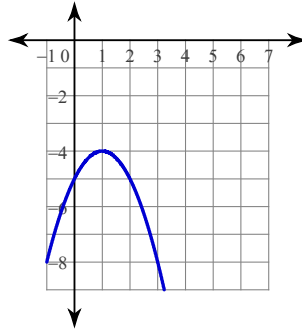
157)



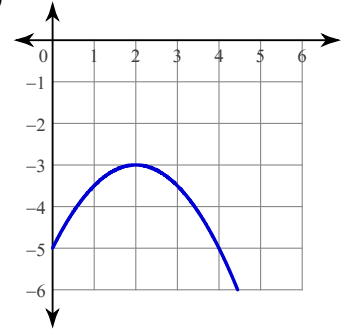
158)



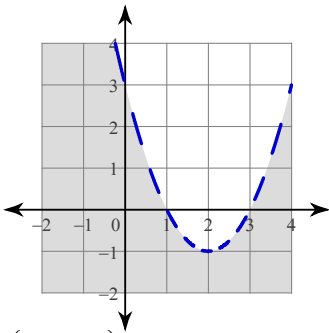
159)



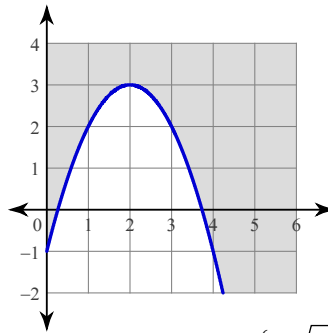
160)



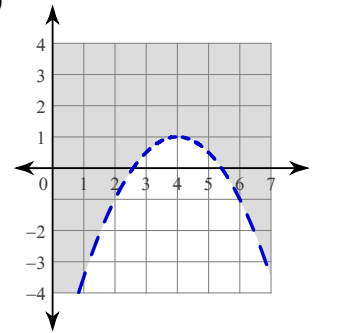
161)



162)



163)



164) $\{2, -18\}$

165) $\{3, -5\}$

166) $\{3\sqrt{2}, -3\sqrt{2}\}$

167) No solution.

168) $\{-8, 3\}$

169) $\{5, 4\}$

170) No solution.

171) $\left\{\frac{-4 + \sqrt{41}}{5}, \frac{-4 - \sqrt{41}}{5}\right\}$

172) $2x\sqrt{5x}$

173) $3x^2\sqrt{3y}$

174) 0

175) $6\sqrt{6} - 10\sqrt{5}$

176) -15

177) $-20\sqrt{3} - 30\sqrt{2}$

178) $\frac{\sqrt{3}}{2}$

179) $\frac{-5 + \sqrt{3}}{20}$

180) $\frac{6 - 8\sqrt{5}}{71}$

181) $\frac{25 - 20\sqrt{5} + 15\sqrt{2} - 12\sqrt{10}}{55}$

182) $\sqrt{65}$

183) $\sqrt{34}$

184) $\left(\frac{1}{2}, 2\right)$

185) (10, 17)

186) $-\frac{7}{5n}; \{0\}$

187) $\frac{2a}{5a-4}; \left\{\frac{4}{5}\right\}$

188) $\frac{k+3}{k+10}; \{-10, 8\}$

189) $\frac{2(p-1)}{5p^2(p-2)}; \{0, 2\}$

190) $2x; \{0\}$

191) $\frac{7n-10}{2n^2}; \{0\}$

192) $\frac{9}{m-6}; \{-4, 6\}$

193) $\frac{5(-r+2)}{2r(r+7)}; \{0, -7, 3\}$